

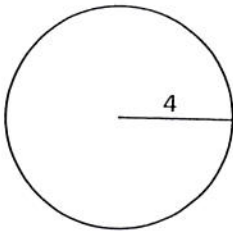
Area and Circumference of Circles

GEOMETRY

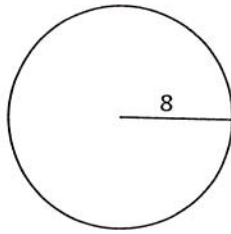
$A = \pi r^2$ $C = \pi d$

Find the area and the circumference for each circle.

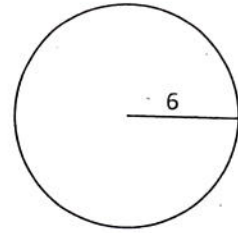
1 A _____
 C _____



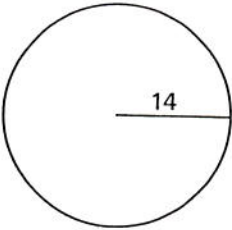
2 A _____
 C _____



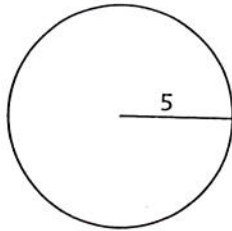
3 A _____
 C _____



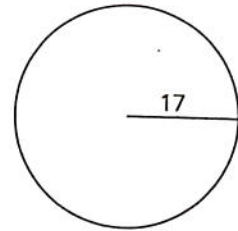
4 A _____
 C _____



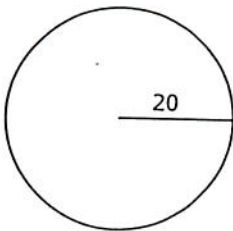
5 A _____
 C _____



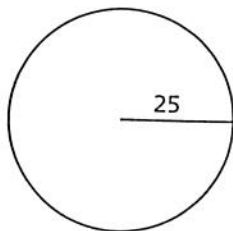
6 A _____
 C _____



7 A _____
 C _____



8 A _____
 C _____



9 A _____
 C _____

