

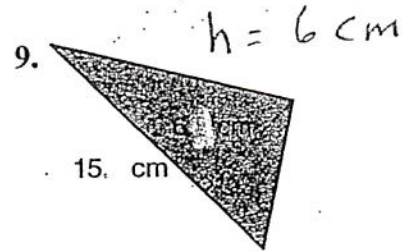
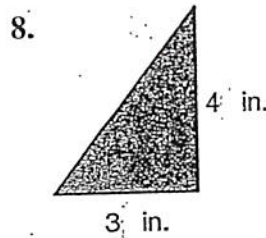
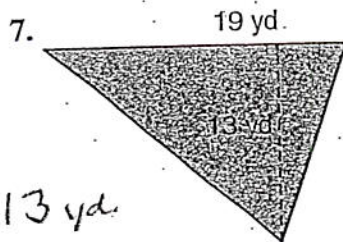
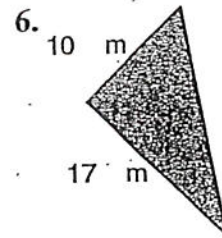
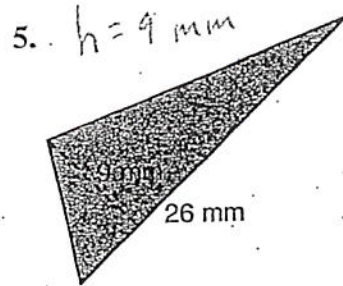
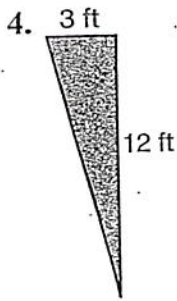
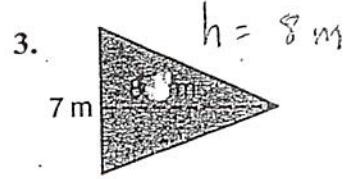
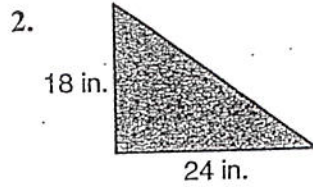
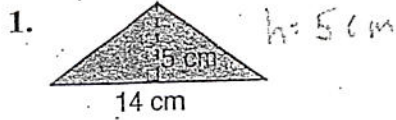
10-2

Name _____ Date _____

Practice

Area of Triangles

Find the area of each triangle.



10. base, 9 ft
height, 16 ft.

11. base, 18 m
height, 6 m

12. base, 5 yd
height, 19 yd

13. base, 15 mm
height, 14 mm.

14. base, 4 in.
height, 11 in.

15. base, 8 cm
height, 23 cm

16. Find the area of a triangle with a base of 42 kilometers and a height of 25 kilometers.