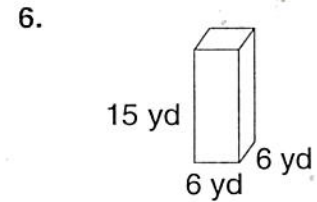
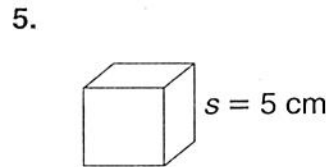
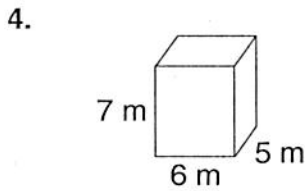
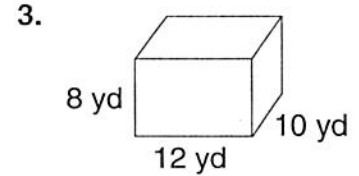
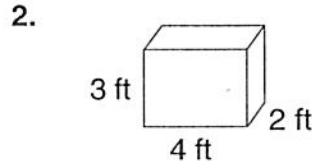
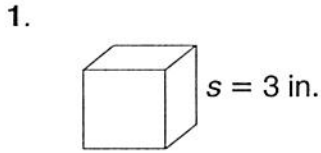
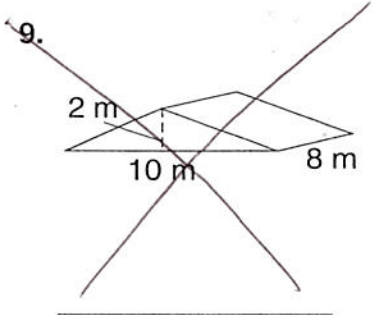
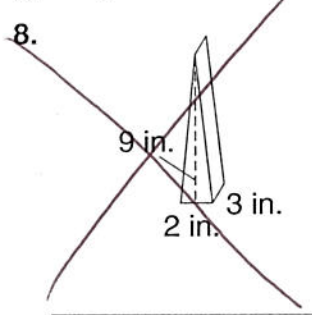
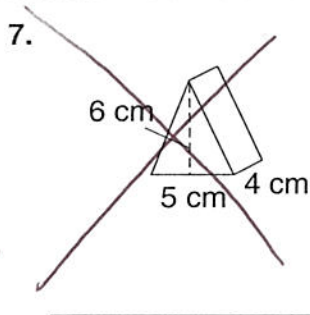


LESSON **Practice A**
10-7 **Volume of Prisms**

Find the volume of each rectangular prism.



Find the volume of each triangular prism.



10. A triangular prism and a rectangular prism have the same lengths, heights, and widths. Which prism has the greater volume?

11. Tim made a toy chest for his little sister's square building blocks. If 6 layers of blocks can fit in the box, and each layer has 15 blocks, how many building blocks can the toy chest hold in all?
