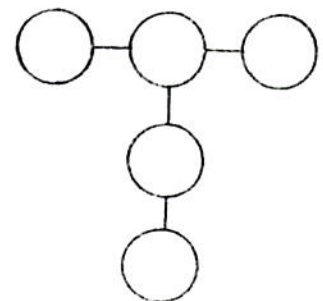
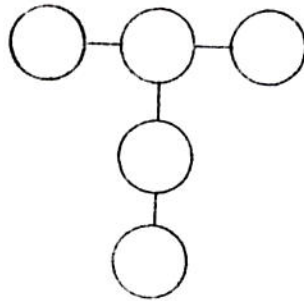
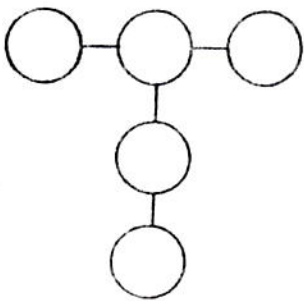


Name \_\_\_\_\_ Period \_\_\_\_\_ Due Date \_\_\_\_\_

## THINK 7

Use only the numbers 1 through 5. The sum in each direction must be the same. Find three different sums.



Use only the numbers 20 through 24. The sum in each direction must be the same. Find three different sums.

