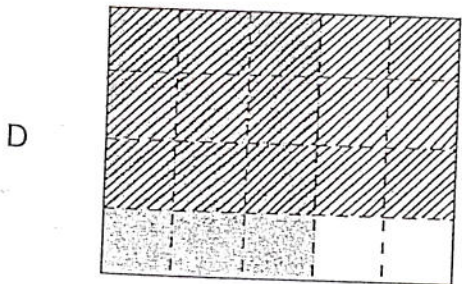
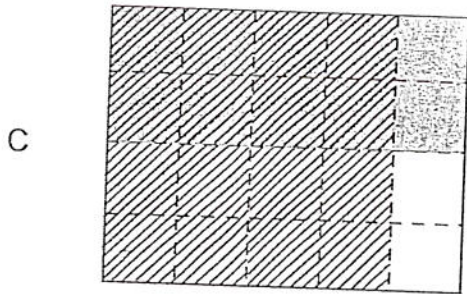
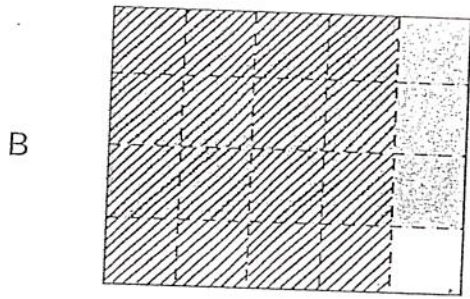
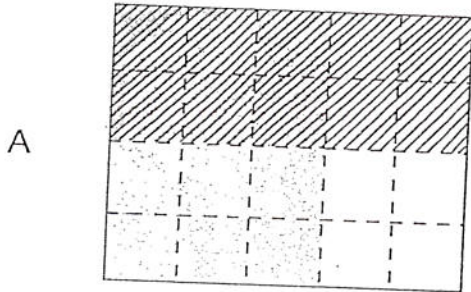
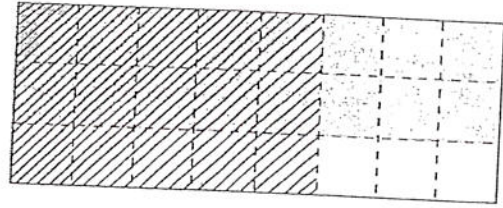




1 Which model best represents $\frac{3}{4} \times \frac{4}{5}$?



2 Which expression best represents the picture shown below?



A $\frac{1}{3} \times \frac{5}{8}$

B $\frac{1}{3} \times \frac{3}{8}$

C $\frac{2}{3} \times \frac{5}{8}$


D $\frac{2}{3} \times \frac{3}{8}$



Fabulous Fractions!

1. Tara and Sara went to the mall together last Saturday. They sat in the mall food court and watched the people walking by. They noticed that $\frac{2}{3}$ of the people were women and $\frac{3}{4}$ of them had at least one child with them. How many of the people were women with children? Draw a picture model and write a number sentence to represent the situation.

2. Write a verbal description and a number sentence to represent the picture model shown.



3. Blaine and Shane are sorting their model car collection. They see that $\frac{3}{5}$ of their car collection consists of sport coupes and $\frac{2}{3}$ of those have sun-roofs. How much of their car collection is made up of sport coupes with sun-roofs? Draw a picture model and write a number sentence to represent the situation.